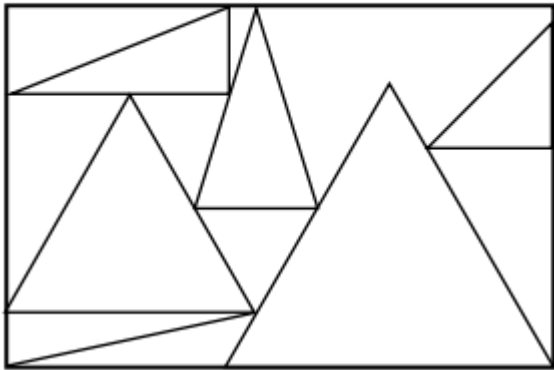


Maths

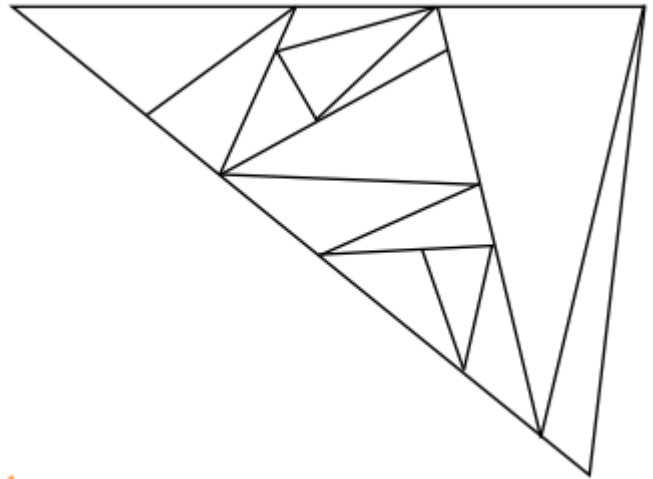
Triangles

1. How many of each triangle type are in the image below?

Equilateral Isosceles Scalene

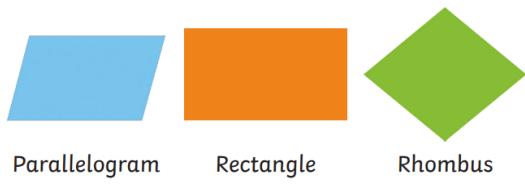


2. Colour the triangle which are scalene in the image below



Quadrilaterals


We have been learning about quadrilaterals in maths



Parallelogram

Rectangle

Rhombus



Square

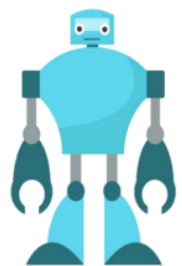
Trapezium (UK)

Qasim is trying to design a robot using only quadrilaterals.

Here is the criteria for his design:

- The robot must include at least 5 different types of quadrilaterals.
- The arms of the robot must have 2 sets of parallel lines.
- The total design must not use more than 20 different quadrilaterals.

Investigate which designs would work.
How many different designs can you create?



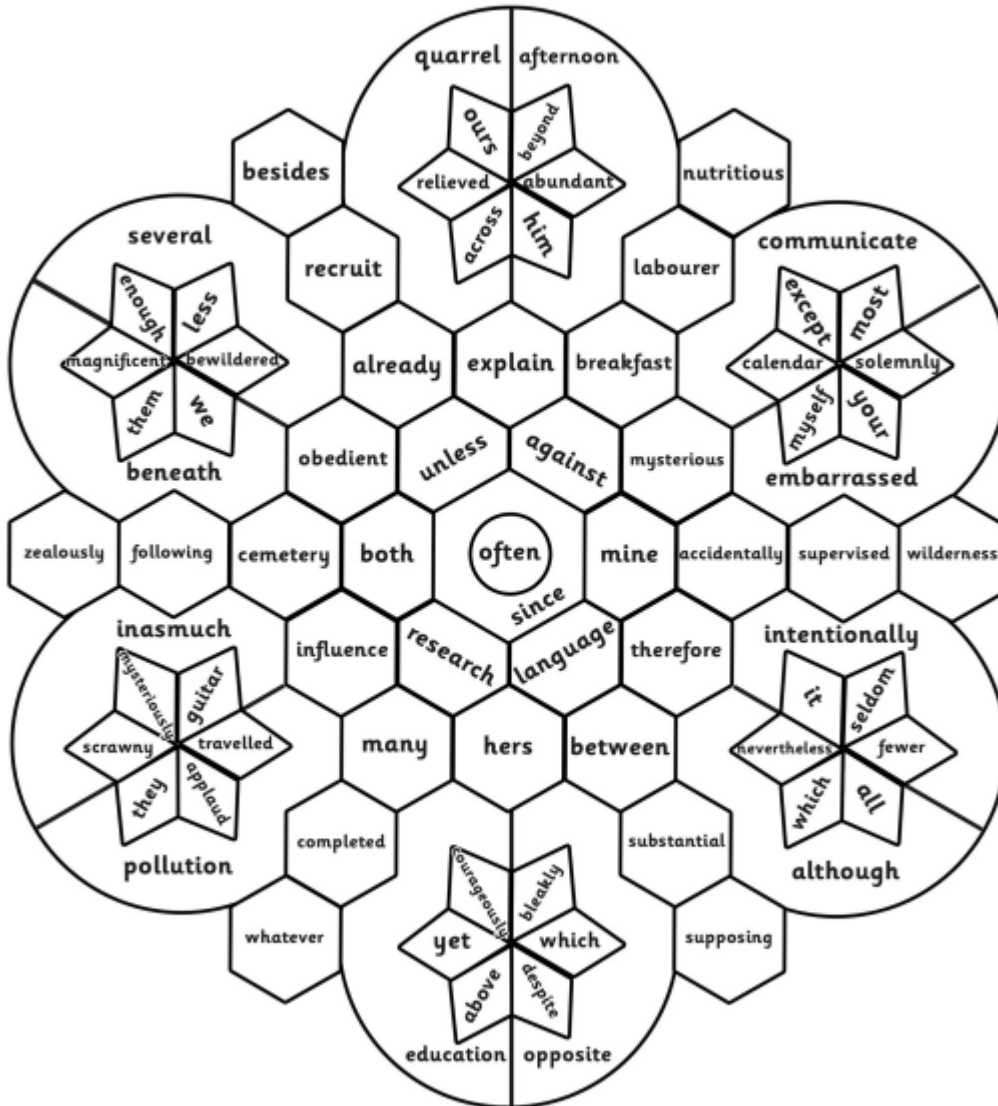
GPS

Can you recognise and name the different word classes on the word flower?

Spellings - Please practise your spellings - this week you are focusing on the suffix ally - when it is added to an adjective to form an adverb

Colour by Word Classes

LO: I can recognise and name verbs, nouns, adjectives, adverbs, conjunctions, prepositions, pronouns and determiners.



Verbs = yellow Nouns = blue Adjectives = purple Determiners = pink

Adverbs = green Conjunctions = red Prepositions = orange Pronouns = turquoise

Please note: some words in this puzzle can be placed in more than one word class in order to promote discussion!