


8 Times Table Maths Mastery Mat

How many legs are there altogether?



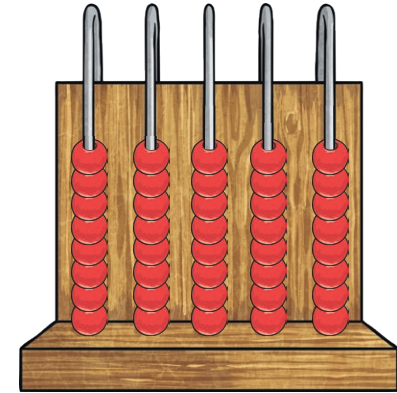
A bottle contains 800ml of juice.

How many millilitres of juice are there in 6 bottles?

ml



Complete the calculation to match the image.



× =

Circle the **correct** calculations.

$8 \times 8 = 63$

$24 \div 3 = 8$

$32 = 4 \times 8$

$96 \div 8 = 11$

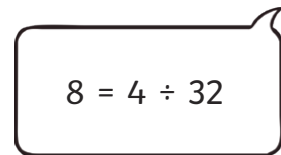
$9 \times 8 = 72$

$8 = 40 \div 4$

$8 = 0 \times 8$

$16 \div 2 = 8$

Explain the mistake.



Draw an array to match this calculation.

$8 \times 11 =$

8 Times Table Maths Mastery Mat

The florist is making bouquets of flowers.

They need 8 flowers for each bouquet.

How many bouquet can the florist make with 96 flowers?



bouquets

Explain how you know this statement is true without calculating the answer.

571 divided by 8 will have a remainder.



Draw a model to match and solve the sentence.

There are 4 equal groups of 8.

There are altogether.

Fill in the missing boxes.

$$72 \div \boxed{} = 8$$

$$\boxed{} \times 8 = 56$$

$$\boxed{} = 10 \times 8$$




There are 5 pizzas.

Each pizza is cut into 8 slices.

How many slices of pizza are there altogether?

slices



Complete the multiplication pyramid.

