


# Maths Homework 1/5/26

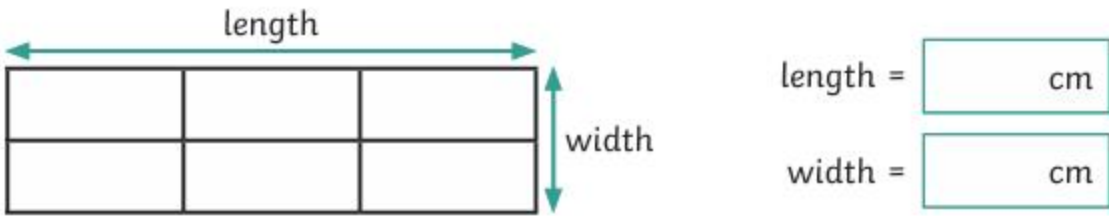
5 minutes of TTRS a day!

1)

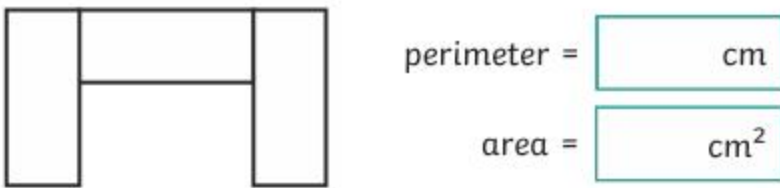
- a) Jia is making a blanket using rectangles that are all the same size. Calculate the perimeter and area of one of her rectangles.



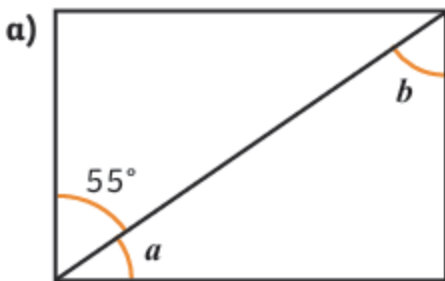
- b) Calculate the length and width of this blanket.



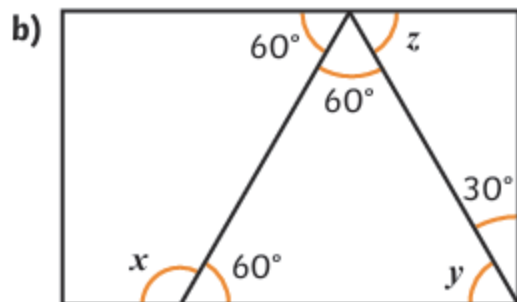
- c) Jia made another blanket using three of the rectangles. Calculate the area and perimeter.



2) Calculate the size of each angle.

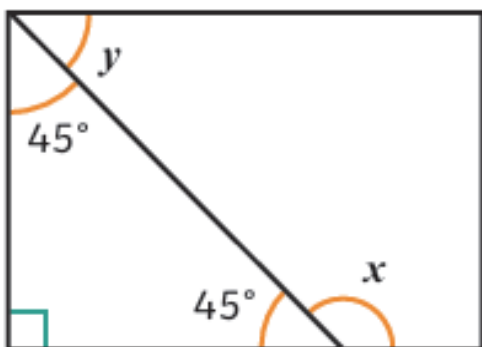


$a = [ ]^\circ$      $b = [ ]^\circ$



$x = [ ]^\circ$      $y = [ ]^\circ$      $z = [ ]^\circ$

Do you agree with Amrit? Explain why.



Angle  $x$  equals  $145^\circ$  and angle  $y$  equals  $50^\circ$ .



## English Homework 1/5/26

Write a personification poem about nature or your favourite place.

You might take inspiration from somewhere you have been before, or you could take inspiration from:

- A beach
- The park
- A thunderstorm
- The woods
- Forest School
- Your garden
- Your favourite place to go on holiday.

Personification gives a non-living thing living characteristics.

Jessica's heart raced at 100 miles per hour.

