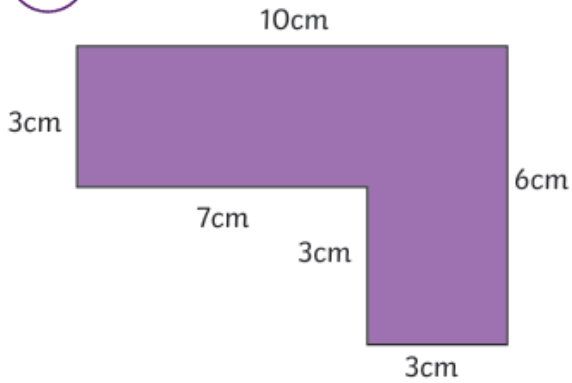


# Maths Homework 27/03/26

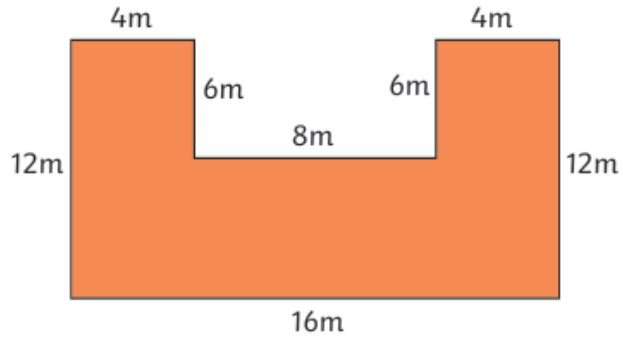
1) Calculate the perimeter of these shapes. Remember to order the side measurements in a way that makes the calculation easier to complete.

a



Calculation:

b



Calculation:

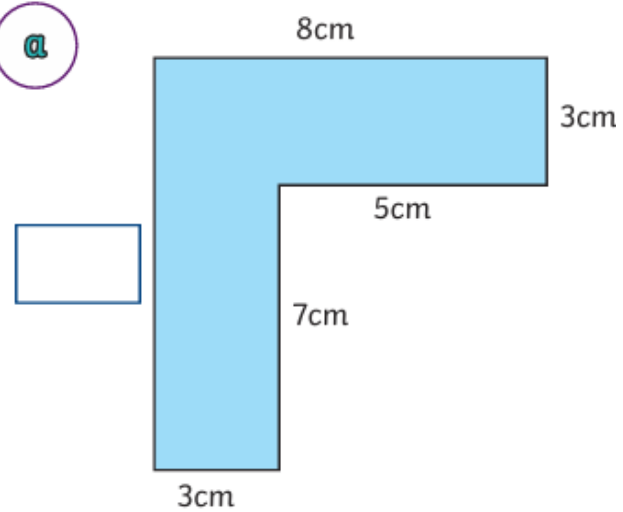


Shapes not drawn to scale

3. Draw 2 of your own rectilinear shapes that have a perimeter of 30cm.

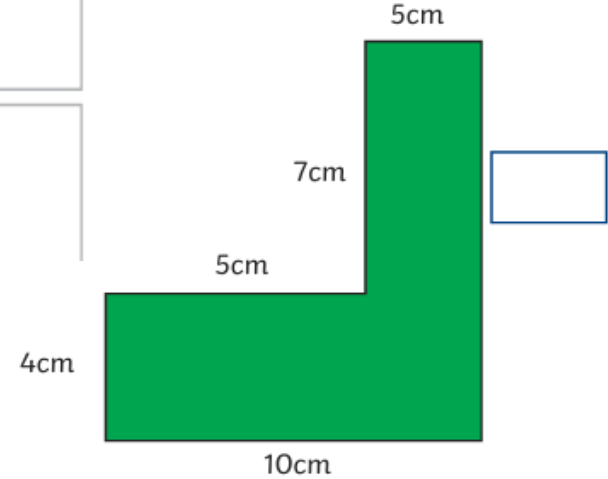
4. TTRS

a



Missing side:

Perimeter:



Missing side:

Perimeter:

## English Homework 27/03/26

Write a recount of our day at the Museum of Kent Life.  
What were your favourite parts of the day? What did you learn?  
Make sure to include the correct spelling, punctuation and capital letters!  
Also include as many grammar and language features as you can!

- Parenthesis
- Expanded noun phrases
- Pronouns
- Chronological order
- Prefixes and suffixes
- Adverbials for time, place and possibility

