

Measuring Length

To measure length using m, cm and mm.



1) Carefully using a ruler, measure the length of each line in cm.

a) _____

b) _____

c) _____

2) Measure the length of the lines in millimetres (mm).

a) _____

b) _____

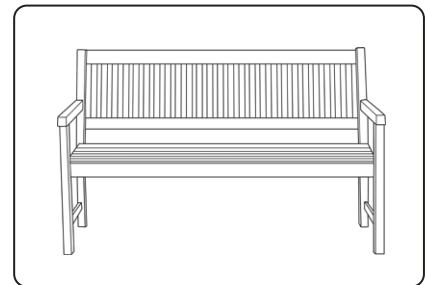
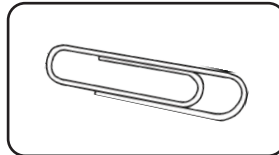

c) _____

3) Which unit of measure would you use to measure the length of these objects?
Draw a line to show your choice.

metres (m)

centimetres (cm)

Millimetres (mm)



4) Find four objects that measure more than 1m and 4 objects that measure less than 1m.

Less Than 1m	More Than 1m
1.	1.
2.	2.
3.	3.
4.	4.