
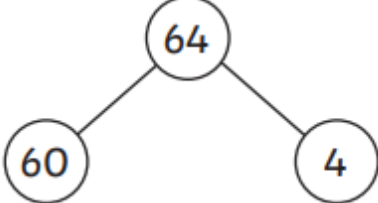
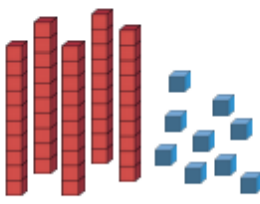
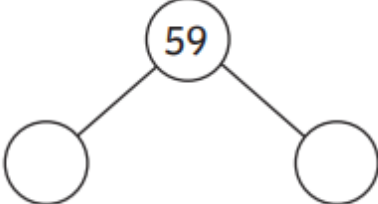
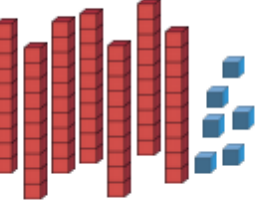
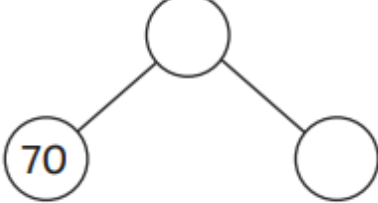

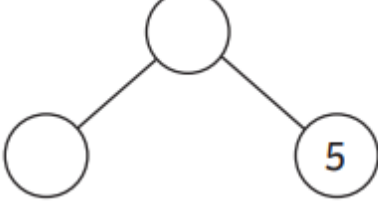
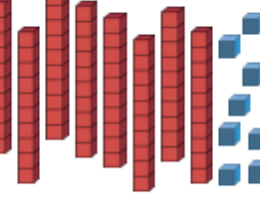
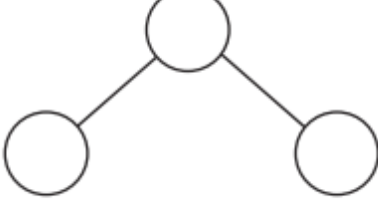
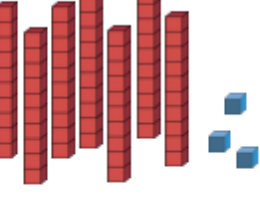
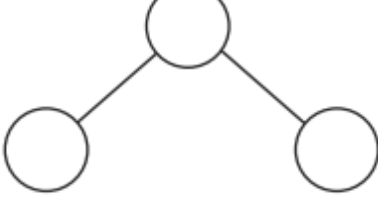


Friday 20th September 2024

Maths Homework

| Make | Count | Part-Whole Model | Complete |
|---|-------|--|--|
|  | 64 |  | There are 6 tens. There are 4 ones. |
|  | |  | There are ___ tens. There are ___ ones. |
|  | |  | There are ___ tens. There are ___ ones. |
|  | |  | There are ___ tens. There are ___ ones. |
|  | |  | There are ___ tens. There are ___ ones. |
|  | |  | There are ___ tens. There are ___ ones. |